







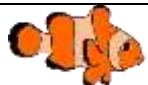
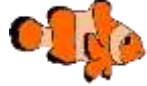




Name \_\_\_\_\_

Date \_\_\_\_\_














## ADDITION &amp; SUBTRACTION PROBLEMS TO 150 SHEET 3

		WORKING OUT
1)	<p>On Monday, I pick 45  .</p> <p>On Tuesday, I pick 58  .</p> <p>On Wednesday, I pick 33  .</p> <p>How many  did I pick in all? _____</p>	
2)	<p>A shop has 128  .</p> <p>It sells 73  .</p> <p>How many are left? _____</p>	
3)	<p>There are 132  .</p> <p>47  go away.</p> <p>What is 132 minus 47? _____</p>	
4)	<p>Jill has 79  .</p> <p>Jen has 68  .</p> <p>How many altogether? _____</p>	
5)	<p>Captain finds 130  .</p> <p>Newton finds 77  .</p> <p>What is the difference? _____</p>	



# ADDITION & SUBTRACTION PROBLEMS TO 150

## SHEET 3 ANSWERS

		WORKING OUT
1)	<p>On Monday, I pick 45  .</p> <p>On Tuesday, I pick 58  .</p> <p>On Wednesday, I pick 33  .</p> <p>How many  did I pick in all? <u>136</u></p>	$\underline{45 + 58 + 33 = 136}$
2)	<p>A shop has 128  .</p> <p>It sells 73  .</p> <p>How many are left? <u>55</u></p>	$\underline{128 - 73 = 55}$
3)	<p>There are 132  .</p> <p>47  go away.</p> <p>What is 132 minus 47? <u>85</u></p>	$\underline{132 - 47 = 85}$
4)	<p>Jill has 79  .</p> <p>Jen has 68  .</p> <p>How many altogether? <u>147</u></p>	$\underline{79 + 68 = 147}$
5)	<p>Captain finds 130  .</p> <p>Newton finds 77  .</p> <p>What is the difference? <u>53</u></p>	$\underline{130 - 77 = 53}$