











Name _____

Date _____



ADDITION & SUBTRACTION PROBLEMS TO 150 SHEET 2UK

		WORKING OUT
1)	<p>There are 85  in a pond.</p> <p>36 more  jump in.</p> <p>How many are there now? _____</p>	
2)	<p>I have £128.</p> <p>I spend £50.</p> <p>How much money is left? £ _____</p>	
3)	<p>A shop sells 54  on Monday.</p> <p>It sells 27  on Tuesday.</p> <p>It sells 45  on Wednesday.</p> <p>How many has it sold in total? _____</p>	
4)	<p>There are 127 .</p> <p>Another 18  are built.</p> <p>How many  are there now? _____</p>	
5)	<p>There are 142 .</p> <p>47  run away.</p> <p>What is 142 minus 27? _____</p>	











Name

Date



ADDITION & SUBTRACTION PROBLEMS TO 150

SHEET 2UK ANSWERS

		WORKING OUT
1)	<p>There are 85  in a pond.</p> <p>36 more  jump in.</p> <p>How many are there now? <u>121</u></p>	<p><u>$85 + 36 = 121$</u></p>
2)	<p>I have £128.</p> <p>I spend £50.</p> <p>How much money is left? £ <u>78</u></p>	<p><u>$£128 - £50 = £78$</u></p>
3)	<p>A shop sells 54  on Monday.</p> <p>It sells 27  on Tuesday.</p> <p>It sells 45  on Wednesday.</p> <p>How many has it sold in total? <u>126</u></p>	<p><u>$54 + 27 + 45 = 126$</u></p>
4)	<p>There are 127 .</p> <p>Another 18  are built.</p> <p>How many  are there now? <u>145</u></p>	<p><u>$127 + 18 = 145$</u></p>
5)	<p>There are 142 .</p> <p>47  run away.</p> <p>What is 142 minus 27? <u>95</u></p>	<p><u>$142 - 47 = 95$</u></p>