











Name \_\_\_\_\_

Date \_\_\_\_\_













## ADDITION &amp; SUBTRACTION PROBLEMS TO 150 SHEET 2

		WORKING OUT
1)	There are 85  in a pond. 36 more  jump in. How many are there now? _____	
2)	I have \$128. I spend \$50. How much money is left? \$ _____	
3)	A shop sells 54  on Monday. It sells 27  on Tuesday. It sells 45  on Wednesday. How many has it sold in total? _____	
4)	There are 127  . Another 18  are built. How many  are there now? _____	
5)	There are 142  . 47  run away. What is 142 minus 27? _____	



# ADDITION & SUBTRACTION PROBLEMS TO 150

## SHEET 2 ANSWERS

		WORKING OUT
1)	<p>There are 85  in a pond.</p> <p>36 more  jump in.</p> <p>How many are there now? <u>121</u></p>	<p><u><math>85 + 36 = 121</math></u></p>
2)	<p>I have \$128.</p> <p>I spend \$50.</p> <p>How much money is left? \$ <u>78</u></p>	<p><u><math>\\$128 - \\$50 = \\$78</math></u></p>
3)	<p>A shop sells 54  on Monday.</p> <p>It sells 27  on Tuesday.</p> <p>It sells 45  on Wednesday.</p> <p>How many has it sold in total? <u>126</u></p>	<p><u><math>54 + 27 + 45 = 126</math></u></p>
4)	<p>There are 127 .</p> <p>Another 18  are built.</p> <p>How many  are there now? <u>145</u></p>	<p><u><math>127 + 18 = 145</math></u></p>
5)	<p>There are 142 .</p> <p>47  run away.</p> <p>What is 142 minus 27? <u>95</u></p>	<p><u><math>142 - 47 = 95</math></u></p>