






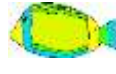





Name \_\_\_\_\_

Date \_\_\_\_\_



# ADDITION & SUBTRACTION PROBLEMS TO 150 SHEET 1UK

		WORKING OUT
1)	<p>A shop has 118 .</p> <p>35  are sold.</p> <p>How many are left? _____</p>	
2)	<p>There are 112  in an airport.</p> <p>36 more  land.</p> <p>How many in total? _____</p>	
3)	<p>There are 117 .</p> <p>42  are washed away.</p> <p>What is 117 minus 42? _____</p>	
4)	<p>There are 102 .</p> <p>37 more  come along.</p> <p>How many  altogether? _____</p>	
5)	<p>Sally has £43.</p> <p>Captain has £95.</p> <p>How much in all? _____</p>	
6)	<p>There are 137  on a tree.</p> <p>26  fall off.</p> <p>How many are left? _____</p>	







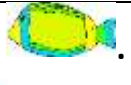




Name \_\_\_\_\_

Date \_\_\_\_\_



# ADDITION & SUBTRACTION PROBLEMS TO 150

## SHEET 1UK ANSWERS

		WORKING OUT
1)	A shop has 118  . 35  are sold. How many are left? _____	<u><math>118 - 35 = 83</math></u>
2)	There are 112  in an airport. 36 more  land. How many in total? _____	<u><math>112 + 36 = 148</math></u>
3)	There are 117  . 42  are washed away. What is 117 minus 42? _____	<u><math>117 - 42 = 75</math></u>
4)	There are 102  . 37 more  come along. How many  altogether? _____	<u><math>102 + 37 = 139</math></u>
5)	Sally has £43. Captain has £95. How much in all? _____	<u><math>£43 + £95 = £138</math></u>
6)	There are 137  on a tree. 26  fall off. How many are left? _____	<u><math>137 - 26 = 111</math></u>

