







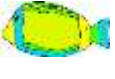




Name \_\_\_\_\_

Date \_\_\_\_\_



## ADDITION &amp; SUBTRACTION PROBLEMS TO 150 SHEET 1

		WORKING OUT
1)	A shop has 118  . 35  are sold. How many are left? _____	
2)	There are 112  in an airport. 36 more  land. How many in total? _____	
3)	There are 117  . 42  are washed away. What is 117 minus 42? _____	
4)	There are 102  . 37 more  come along. How many  altogether? _____	
5)	Sally has \$43. Captain has \$95. How much in all? _____	
6)	There are 137  on a tree. 26  fall off. How many are left? _____	














Name \_\_\_\_\_

Date \_\_\_\_\_



# ADDITION & SUBTRACTION PROBLEMS TO 150

## SHEET 1 ANSWERS

		WORKING OUT
1)	A shop has 118  . 35  are sold. How many are left? _____	<u><math>118 - 35 = 83</math></u>
2)	There are 112  in an airport. 36 more  land. How many in total? _____	<u><math>112 + 36 = 148</math></u>
3)	There are 117  . 42  are washed away. What is 117 minus 42? _____	<u><math>117 - 42 = 75</math></u>
4)	There are 102  . 37 more  come along. How many  altogether? _____	<u><math>102 + 37 = 139</math></u>
5)	Sally has \$43. Captain has \$95. How much in all? _____	<u><math>\\$43 + \\$95 = \\$138</math></u>
6)	There are 137  on a tree. 26  fall off. How many are left? _____	<u><math>137 - 26 = 111</math></u>