











Name \_\_\_\_\_

Date \_\_\_\_\_



## ADDITION &amp; SUBTRACTION PROBLEMS TO 100 SHEET 3UK

		WORKING OUT
1)	There are 83  . 26  fly away. How many are left? _____	
2)	A shop sells 55  on Monday. It sells 43  on Tuesday. How many altogether? _____	
3)	There are 75  . 28  are cut down. How many are left? _____	
4)	There are 61  . 34 more  come along. How many are there in total? _____	
5)	Captain catches 26  . Newton catches 18  . Sally catches 45  . What is the sum? _____	
6)	I have £85. I spend £62. How much money have I left? £ _____	












Name

Date



# ADDITION & SUBTRACTION PROBLEMS TO 100

## SHEET 3UK ANSWERS

		WORKING OUT
1)	<p>There are 83  .</p> <p>26  fly away.</p> <p>How many are left? <u>57</u></p>	<u><math>83 - 26 = 57</math></u>
2)	<p>A shop sells 55  on Monday.</p> <p>It sells 43  on Tuesday.</p> <p>How many altogether? <u>98</u></p>	<u><math>55 + 43 = 98</math></u>
3)	<p>There are 75  .</p> <p>28  are cut down.</p> <p>How many are left? <u>47</u></p>	<u><math>75 - 28 = 47</math></u>
4)	<p>There are 61  .</p> <p>34 more  come along.</p> <p>How many are there in total? <u>95</u></p>	<u><math>61 + 34 = 95</math></u>
5)	<p>Captain catches 26  .</p> <p>Newton catches 18  .</p> <p>Sally catches 45  .</p> <p>What is the sum? <u>89</u></p>	<u><math>26 + 18 + 45 = 89</math></u>
6)	<p>I have £85.</p> <p>I spend £62.</p> <p>How much money have I left? £ <u>23</u></p>	<u><math>£85 - £62 = £23</math></u>