











Name \_\_\_\_\_

Date \_\_\_\_\_













## ADDITION &amp; SUBTRACTION PROBLEMS TO 100 SHEET 2UK

		WORKING OUT
1)	A shop has 73  . 25  are sold. How many are left? _____	
2)	Sally has 68  . Frazer has 42  . What is the difference? _____	
3)	There are 57 blue fish  and 26 yellow fish  . What is the sum? _____	
4)	There are 84  in a parking lot. 27  drive away. What is 84 minus 27? _____	
5)	I spend £64. I spend £25 more. How much money did I spend? £ _____	
6)	Captain makes 61  . Newton makes 35  . How many more does Captain make? _____	



# ADDITION & SUBTRACTION PROBLEMS TO 100

## SHEET 2UK ANSWERS

		WORKING OUT
1)	A shop has 73  . 25  are sold. How many are left? <u>48</u>	<u><math>73 - 25 = 48</math></u>
2)	Sally has 68  . Frazer has 42  . What is the difference? <u>26</u>	<u><math>68 - 42 = 26</math></u>
3)	There are 57 blue fish  and 26 yellow fish  . What is the sum? <u>83</u>	<u><math>57 + 26 = 83</math></u>
4)	There are 84  in a parking lot. 27  drive away. What is 84 minus 27? <u>57</u>	<u><math>84 - 27 = 57</math></u>
5)	I spend £64. I spend £25 more. How much money did I spend? £ <u>91</u>	<u><math>£64 + £25 = £91</math></u>
6)	Captain makes 61  . Newton makes 35  . How many more does Captain make? <u>26</u>	<u><math>61 - 35 = 26</math></u>