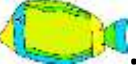













Name _____

Date _____



ADDITION & SUBTRACTION PROBLEMS TO 100 SHEET 1

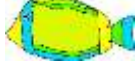
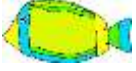










These problems do not involve carrying or regrouping.	WORKING OUT
1) I have 58  . I buy 21  more. How many do I have now? _____	
2) There are 63  . 31  fly away. How many are left? _____	
3) Newton has 74  . Sally has 21  . What is the difference? _____	
4) There are 60  in a parking lot. 35 more  come along. How many are there in total? _____	
5) Frazer has 46  . Flame has 33  . What is the sum? _____	
6) Captain catches 75  . He puts 50  back. How many does he have left? _____	





ADDITION & SUBTRACTION PROBLEMS TO 100

SHEET 1 ANSWERS

These problems do not involve carrying or regrouping.		WORKING OUT
1)	<p>I have 58 .</p> <p>I buy 21  more.</p> <p>How many do I have now? <u>79</u></p>	<u>$58 + 21 = 79$</u>
2)	<p>There are 63 .</p> <p>31  fly away.</p> <p>How many are left? <u>32</u></p>	<u>$63 - 31 = 32$</u>
3)	<p>Newton has 74 .</p> <p>Sally has 21 .</p> <p>What is the difference? <u>53</u></p>	<u>$74 - 21 = 53$</u>
4)	<p>There are 60  in a parking lot.</p> <p>35 more  come along.</p> <p>How many are there in total? <u>95</u></p>	<u>$60 + 35 = 95$</u>
5)	<p>Frazer has 46 .</p> <p>Flame has 33 .</p> <p>What is the sum? <u>79</u></p>	<u>$46 + 33 = 79$</u>
6)	<p>Captain catches 75 .</p> <p>He puts 50  back.</p> <p>How many does he have left? <u>25</u></p>	<u>$75 - 50 = 25$</u>