


















Name _____

Date _____



ADDITION WORD PROBLEMS TO 50 SHEET 3



















		WORKING OUT
1)	I buy 13  on Monday. I buy 11  on Tuesday. I buy 12  on Wednesday. How many  in total? _____	
2)	There are 24  . There are 13  . There is 6  . What is the sum? _____	
3)	Flame has 12  . Tyger has 13  . Sally has 10  . How many in all? _____	
4)	The bakery sells 22  on Monday, 15  on Tuesday and 11  on Wednesday. How many  in total? _____	
5)	Captain has 14  . Sally has 12  . Newton has 16  . How many  in total? _____	

Name

Date



ADDITION WORD PROBLEMS TO 50 SHEET 3 ANSWERS

		WORKING OUT
1)	<p>I buy 13  on Monday.</p> <p>I buy 11  on Tuesday.</p> <p>I buy 12  on Wednesday.</p> <p>How many  in total? <u>36</u></p>	$\underline{13 + 11 + 12 = 36}$
2)	<p>There are 24 .</p> <p>There are 13 .</p> <p>There is 6 .</p> <p>What is the sum? <u>43</u></p>	$\underline{24 + 13 + 6 = 43}$
3)	<p>Flame has 12 . Tyger has 13 .</p> <p>Sally has 10 .</p> <p>How many in all? <u>25</u></p>	$\underline{12 + 13 + 10 = 25}$
4)	<p>The bakery sells 22  on Monday, 15  on Tuesday and 11  on Wednesday.</p> <p>How many  in total? <u>48</u></p>	$\underline{22 + 15 + 11 = 48}$
5)	<p>Captain has 14 . Sally has 12 .</p> <p>Newton has 16 .</p> <p>How many  in total? <u>42</u></p>	$\underline{14 + 12 + 16 = 42}$