













Name _____

Date _____















ADDITION WORD PROBLEMS TO 50 SHEET 2

		WORKING OUT
1)	There are 24  . 24  more come. What is the total? _____	
2)	I have 16  . I buy 23  more. How many do I have now? _____	
3)	Joey catches 27  . Julie catches 14  . What is the sum? _____	
4)	There are 21  . 16  more come. How many altogether? _____	
5)	I have 16  . I get 28  more. How many in all? _____	
6)	I see 32  . I see 16  more. What is the sum? _____	



ADDITION WORD PROBLEMS TO 50 SHEET 2 ANSWERS

		WORKING OUT
1)	There are 24  . 24  more come. What is the total? <u>48</u>	<u>$24 + 24 = 48$</u>
2)	I have 16  . I buy 23  more. How many do I have now? <u>39</u>	<u>$16 + 23 = 39$</u>
3)	Joey catches 27  . Julie catches 14  . What is the sum? <u>41</u>	<u>$27 + 14 = 41$</u>
4)	There are 21  . 16  more come. How many altogether? <u>48</u>	<u>$21 + 16 = 48$</u>
5)	I have 16  . I get 28  more. How many in all? <u>44</u>	<u>$16 + 28 = 44$</u>
6)	I see 32  . I see 16  more. What is the sum? <u>48</u>	<u>$32 + 16 = 48$</u>