













Name _____

Date _____



ADDITION WORD PROBLEMS TO 150 SHEET 3













		WORKING OUT
1)	<p>On Monday, I see 35  .</p> <p>On Tuesday, I see 24  .</p> <p>On Wednesday, I see 47  .</p> <p>How many  in total? _____</p>	
2)	<p>A shop sells 59  .</p> <p>The next day it sells 34  .</p> <p>The following day, it sells 43  more.</p> <p>How many  were sold? _____</p>	
3)	<p>There are 68  in a garden.</p> <p>26 more  come along.</p> <p>Another 34 more  arrive.</p> <p>How many  are there now? _____</p>	
4)	<p>Captain has \$57.</p> <p>Sally has \$66.</p> <p>Tyger has \$9.</p> <p>What is the sum of their money? \$ _____</p>	

Name

Date



ADDITION WORD PROBLEMS TO 150 SHEET 3 ANSWERS

		WORKING OUT
1)	<p>On Monday, I see 35  .</p> <p>On Tuesday, I see 24  .</p> <p>On Wednesday, I see 47  .</p> <p>How many  in total? <u>106</u></p>	$\underline{35 + 24 + 47 =}$ $\underline{106}$
2)	<p>A shop sells 59  .</p> <p>The next day it sells 34  .</p> <p>The following day, it sells 43  more.</p> <p>How many  were sold? <u>136</u></p>	$\underline{59 + 34 + 43 =}$ $\underline{136}$
3)	<p>There are 68  in a garden.</p> <p>26 more  come along.</p> <p>Another 34 more  arrive.</p> <p>How many  are there now? <u>128</u></p>	$\underline{68 + 26 + 34 =}$ $\underline{128}$
4)	<p>Captain has \$57.</p> <p>Sally has \$66.</p> <p>Tyger has \$9.</p> <p>What is the sum of their money? <u>\$132</u></p>	$\underline{\$57 + \$66 + \$9 =}$ $\underline{\$132}$