

















Name \_\_\_\_\_

Date \_\_\_\_\_



# ADDITION WORD PROBLEMS TO 100 SHEET 3UK

















		WORKING OUT
1)	<p>On Monday, I buy 14  .</p> <p>On Tuesday, I buy 15  .</p> <p>On Wednesday, I buy 23  .</p> <p>How many  in total? _____</p>	
2)	<p>Tyger has 16  . Sally has 23  .</p> <p>Frazer has 31  .</p> <p>How many  in all? _____</p>	
3)	<p>I buy 35  .</p> <p>A week later I buy 12  more.</p> <p>Two weeks later, I buy 16  .</p> <p>How many  do I have? _____</p>	
4)	<p>There are 47  .</p> <p>14 more  are built.</p> <p>Next year, 25 more  are built.</p> <p>How many  in all? _____</p>	

Name

Date



## ADDITION WORD PROBLEMS TO 100 SHEET 3UK ANSWERS

		WORKING OUT
1)	<p>On Monday, I buy 14 .</p> <p>On Tuesday, I buy 15 .</p> <p>On Wednesday, I buy 23 .</p> <p>How many  in total? <u>52</u></p>	$\begin{array}{r} 14 + 15 + 23 = \\ \hline 52 \end{array}$
2)	<p>Tyger has 16 . Sally has 23 .</p> <p>Frazer has 31 .</p> <p>How many  in all? <u>70</u></p>	$\begin{array}{r} 16 + 23 + 31 = \\ \hline 70 \end{array}$
3)	<p>I buy 35 .</p> <p>A week later I buy 12  more.</p> <p>Two weeks later, I buy 16 .</p> <p>How many  do I have? <u>63</u></p>	$\begin{array}{r} 35 + 12 + 16 = \\ \hline 63 \end{array}$
4)	<p>There are 47 .</p> <p>14 more  are built.</p> <p>Next year, 25 more  are built.</p> <p>How many  in all? <u>86</u></p>	$\begin{array}{r} 47 + 14 + 25 = \\ \hline 86 \end{array}$