















Name _____

Date _____

















ADDITION WORD PROBLEMS TO 100 SHEET 1

| These problems do not involve carrying. | | WORKING OUT |
|---|--|-------------|
| 1) | I eat 52  in a month. Next month I eat 25  more. How many  did I eat in total? _____ | |
| 2) | There are 36  . 21 more  come. How many  in all? _____ | |
| 3) | Frazer has 54  . Sally has 12  . What is the sum? _____ | |
| 4) | Tyger has 40¢. He gets 26¢ more. How much money does he have? _____ ¢ | |
| 5) | There are 35  . 40 more  come along. How many  are there now? _____ | |
| 6) | There are 43  in a road. 45 more  drive into the road. How many  in the road now? _____ | |





ADDITION WORD PROBLEMS TO 100 SHEET 1 ANSWERS

| These problems do not involve carrying. | | WORKING OUT |
|---|---|---|
| 1) | <p>I eat 52  in a month.</p> <p>Next month I eat 25  more.</p> <p>How many  did I eat in total? <u>77</u></p> | <p><u>$52 + 25 = 77$</u></p> |
| 2) | <p>There are 36  .</p> <p>21 more  come.</p> <p>How many  in all? <u>57</u></p> | <p><u>$36 + 21 = 57$</u></p> |
| 3) | <p>Frazer has 54  .</p> <p>Sally has 12  .</p> <p>What is the sum? <u>66</u></p> | <p><u>$54 + 12 = 66$</u></p> |
| 4) | <p>Tyger has 40¢.</p> <p>He gets 26¢ more.</p> <p>How much money does he have? <u>66</u> ¢</p> | <p><u>$40 + 26 = 66$</u></p> |
| 5) | <p>There are 35  .</p> <p>40 more  come along.</p> <p>How many  are there now? <u>75</u></p> | <p><u>$35 + 40 = 75$</u></p> |
| 6) | <p>There are 43  in a road.</p> <p>45 more  drive into the road.</p> <p>How many  in the road now? <u>88</u></p> | <p><u>$43 + 45 = 88$</u></p> |