

Name

Date



# SPOT THE TRANSFORMATION SHEET 3

Circle the correct word which describes how the 1<sup>st</sup> shape has been transformed to the 2<sup>nd</sup> shape in just one transformation.

There is more than one correct answer for some of the transformations.

		<p>enlarged    reduced    flipped    rotated</p>
		<p>enlarged    reduced    flipped    rotated</p>
		<p>enlarged    reduced    flipped    rotated</p>
		<p>enlarged    reduced    flipped    rotated</p>
		<p>enlarged    reduced    flipped    rotated</p>
		<p>enlarged    reduced    flipped    rotated</p>
		<p>enlarged    reduced    flipped    rotated</p>



2ND GRADE

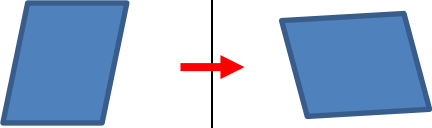
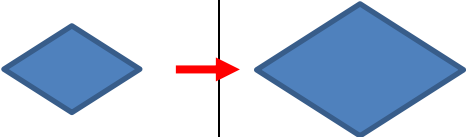
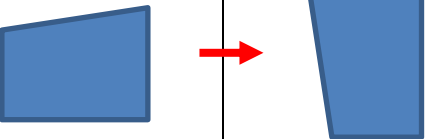
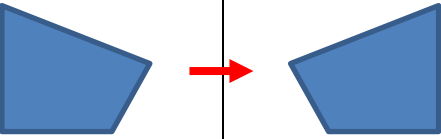
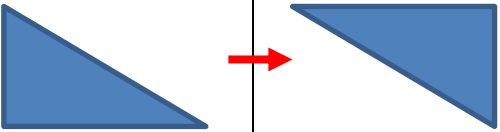
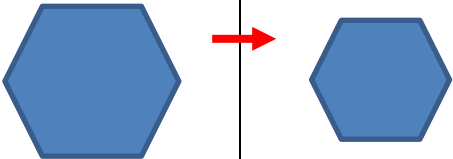
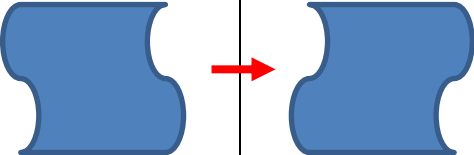
[MATH-SALAMANDERS.COM](http://MATH-SALAMANDERS.COM)

Name

Date



# SPOT THE TRANSFORMATION SHEET 3 ANSWERS

	enlarged   reduced   flipped <b>rotated</b>
	<b>enlarged</b> reduced   flipped   rotated
	enlarged   reduced   flipped <b>rotated</b>
	enlarged   reduced <b>flipped</b> rotated
	enlarged   reduced   flipped <b>rotated</b>
	enlarged <b>reduced</b> flipped   rotated
	enlarged   reduced <b>flipped</b> rotated



2ND GRADE

MATH-SALAMANDERS.COM