

Name

Date



SPOT THE TRANSFORMATION SHEET 2

Circle the correct word which describes how the 1st shape has been transformed to the 2nd shape in just one transformation.

There is more than one correct answer for some of the transformations.

		enlarged reduced flipped rotated
		enlarged reduced flipped rotated
		enlarged reduced flipped rotated
		enlarged reduced flipped rotated
		enlarged reduced flipped rotated
		enlarged reduced flipped rotated
		enlarged reduced flipped rotated



2ND GRADE

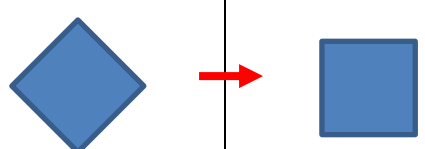
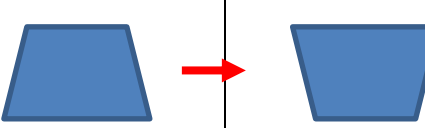
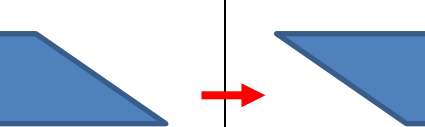
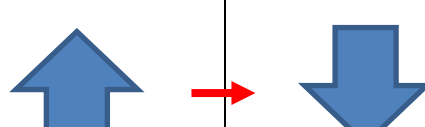

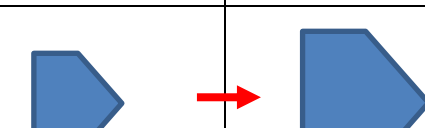

MATH-SALAMANDERS.COM

Name

Date



SPOT THE TRANSFORMATION SHEET 2 ANSWERS

	enlarged reduced flipped rotated
	enlarged reduced flipped rotated
	enlarged reduced flipped rotated
	enlarged reduced flipped rotated
	enlarged reduced flipped rotated
	enlarged reduced flipped rotated
	enlarged reduced flipped rotated



2ND GRADE

MATH-SALAMANDERS.COM