

Name

Date



NAME THE 3D SHAPES 2

Write the correct name for each shape using the list below.

1)			7)		
2)			8)		
3)			9)		
4)			10)		
5)			11)		
6)			12)		

cuboid	sphere	prism
pyramid	cone	cylinder


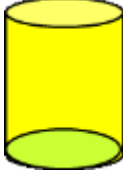
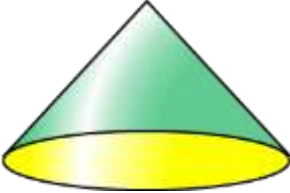
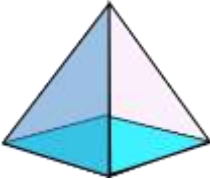
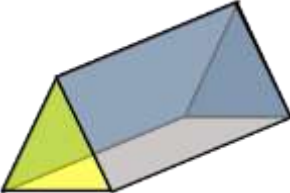


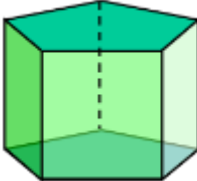
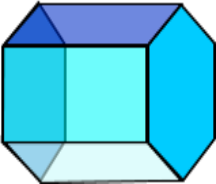
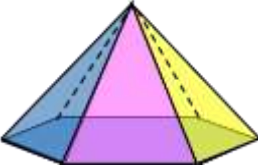


Name

Date



NAME THE 3D SHAPES 2 ANSWERS

Write the correct name for each shape using the list below.

1)		<u>sphere</u>	7)		<u>cylinder</u>
2)		<u>cone</u>	8)		<u>pyramid</u>
3)		<u>prism</u>	9)		<u>cuboid, cube or prism</u>
4)		<u>cylinder</u>	10)		<u>prism</u>
5)		<u>prism</u>	11)		<u>pyramid</u>
6)		<u>pyramid</u>	12)		<u>cuboid or prism</u>

cuboid	sphere	prism
pyramid	cone	cylinder