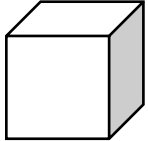
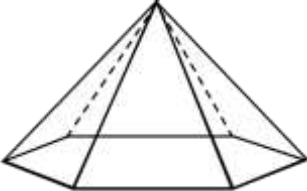
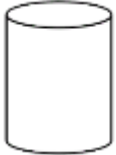

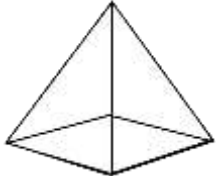
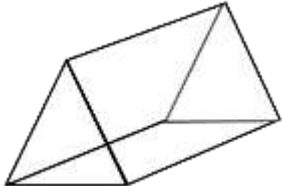





IDENTIFY FACES ON 3D SHAPES 1

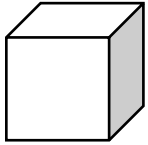
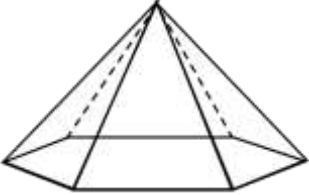
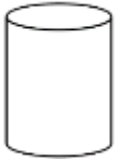

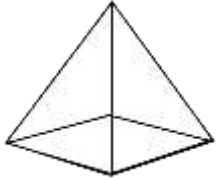
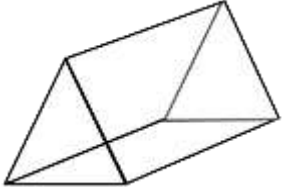

Answer 'yes' or 'no' to each of the questions.

1)		<p>Does it have a circle as a face?</p> <p>Does it have a square as a face?</p>
2)		<p>Does it have a triangle as a face?</p> <p>Does it have a square as a face?</p>
3)		<p>Does it have a triangle as a face?</p> <p>Does it have a circle as a face?</p>
4)		<p>Does it have a square as a face?</p> <p>Does it have a triangle as a face?</p>
5)		<p>Does it have a square as a face?</p> <p>Does it have a triangle as a face?</p>
6)		<p>Does it have a rectangle as a face?</p> <p>Does it have a circle as a face?</p>
7)		<p>Does it have a triangle as a face?</p> <p>Does it have a circle as a face?</p>



IDENTIFY FACES ON 3D SHAPES 1 ANSWERS

Answer 'yes' or 'no' to each of the questions.

1)		<p>Does it have a circle as a face? <u>N</u></p> <p>Does it have a square as a face? <u>Y</u></p>
2)		<p>Does it have a triangle as a face? <u>Y</u></p> <p>Does it have a square as a face? <u>N</u></p>
3)		<p>Does it have a triangle as a face? <u>N</u></p> <p>Does it have a circle as a face? <u>Y</u></p>
4)		<p>Does it have a square as a face? <u>Y</u></p> <p>Does it have a triangle as a face? <u>N</u></p>
5)		<p>Does it have a square as a face? <u>Y</u></p> <p>Does it have a triangle as a face? <u>Y</u></p>
6)		<p>Does it have a rectangle as a face? <u>Y</u></p> <p>Does it have a circle as a face? <u>N</u></p>
7)		<p>Does it have a triangle as a face? <u>N</u></p> <p>Does it have a circle as a face? <u>Y</u></p>