

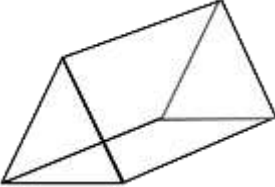
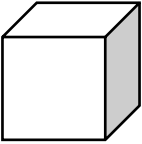
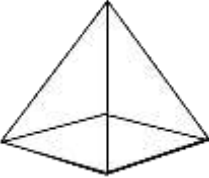
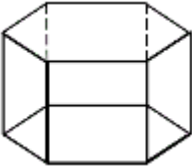

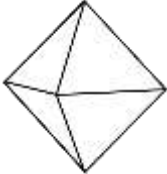
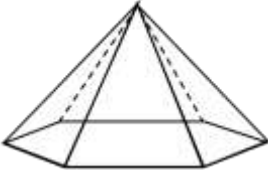
Name

Date



# FACES, EDGES AND VERTICES SHEET 2

Count the number of faces, edges and vertices.

|    | Shape   | faces | edges | vertices |
|----|---|-------|-------|----------|
| 1) |    |       |       |          |
| 2) |    |       |       |          |
| 3) |   |       |       |          |
| 4) |  |       |       |          |
| 5) |  |       |       |          |
| 6) |  |       |       |          |
| 7) |  |       |       |          |



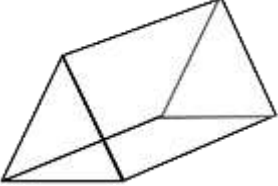
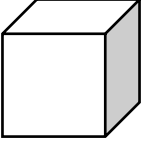
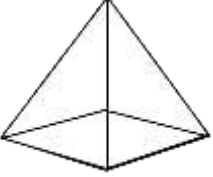
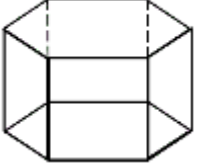

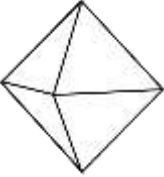
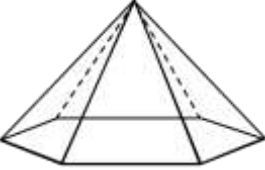
Name

Date



# FACES, EDGES AND VERTICES SHEET 2 ANSWERS

Count the number of faces, edges and vertices.

|    | Shape   | faces    | edges     | vertices  |
|----|---|----------|-----------|-----------|
| 1) |    | <u>5</u> | <u>9</u>  | <u>6</u>  |
| 2) |    | <u>6</u> | <u>12</u> | <u>8</u>  |
| 3) |   | <u>5</u> | <u>8</u>  | <u>5</u>  |
| 4) |  | <u>8</u> | <u>18</u> | <u>12</u> |
| 5) |  | <u>6</u> | <u>12</u> | <u>8</u>  |
| 6) |  | <u>8</u> | <u>12</u> | <u>6</u>  |
| 7) |  | <u>7</u> | <u>12</u> | <u>7</u>  |