

Name


Date




CAN YOU DRAW IT? SHEET 2

See how many of the shapes you can draw below. Use the dots to help you. Some of the shapes may be impossible to draw!


1) A triangle with 4 sides.




2) A rhombus



3) A square with no horizontal or vertical lines



4) An acute triangle (a triangle with all acute angles).



2ND GRADE

MATH-SALAMANDERS.COM



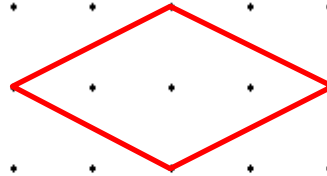
CAN YOU DRAW IT? SHEET 2 ANSWERS

Here are some examples of correct answers.

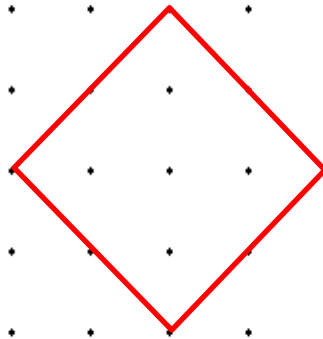
- 1) A triangle with 4 sides.

This shape is IMPOSSIBLE -
all triangles have 3 sides.

- 2) A rhombus



- 3) A square with no
horizontal or vertical lines



- 4) An acute triangle (a
triangle with all acute
angles).

