




CAN YOU DRAW IT? SHEET 1

See how many of the shapes you can draw below. Use the dots to help you. Some of the shapes may be impossible to draw!


- 1) A rectangle with all sides equal.



- 2) A right triangle (a triangle with a right angle)



- 3) A square with no right angles.



- 4) A parallelogram with no right angles.



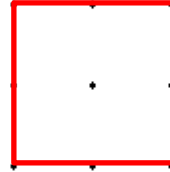


CAN YOU DRAW IT? SHEET 1 ANSWERS

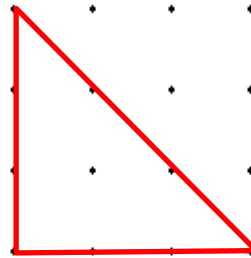
Here are some examples of correct answers.

- 1) A rectangle with all sides equal.

This is a special type of rectangle called a square!



- 2) A right triangle (a triangle with a right angle)



- 3) A square with no right angles.

IMPOSSIBLE

- 4) A parallelogram with no right angles.

