

Name _____

Date _____

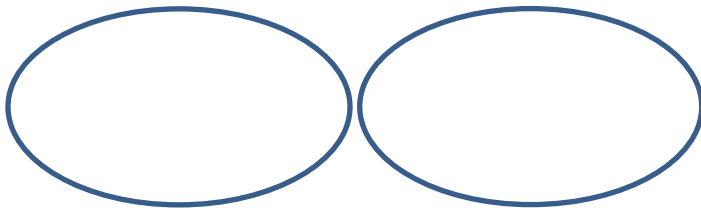


UNDERSTANDING DIVISION 3

Work out the answers to these division sentences using sharing and grouping.

SHARING

Divide 14 into 2 equal groups.



There are ____ in each group.

Division sentence: $14 \div 2 = \underline{\quad}$


GROUPING

Divide 14 into groups of 2.

There are ____ groups of 2.

Division sentence: $14 \div 2 = \underline{\quad}$

Divide 18 into 3 equal groups.



There are ____ in each group.


Division sentence: $\underline{\quad} \div \underline{\quad} = \underline{\quad}$

Divide 18 into groups of 3.

There are ____ groups of 3.

Division sentence: $\underline{\quad} \div \underline{\quad} = \underline{\quad}$

Divide 20 into 5 equal groups.



There are ____ in each group.

Division sentence: $\underline{\quad} \div \underline{\quad} = \underline{\quad}$

Divide 20 into groups of 5.

There are ____ groups of 5.

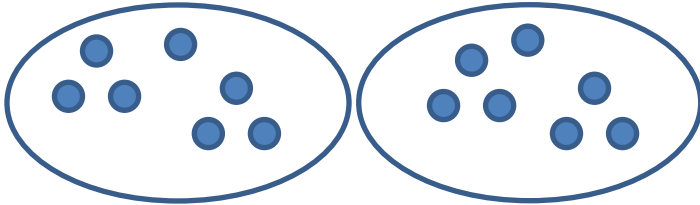
Division sentence: $\underline{\quad} \div \underline{\quad} = \underline{\quad}$



UNDERSTANDING DIVISION 3 ANSWERS

SHARING

Divide 14 into 2 equal groups.



There are 7 in each group.

Division sentence: $14 \div 2 = \underline{7}$

GROUPING


Divide 14 into groups of 2.



There are 7 groups of 2.

Division sentence: $14 \div 2 = \underline{7}$

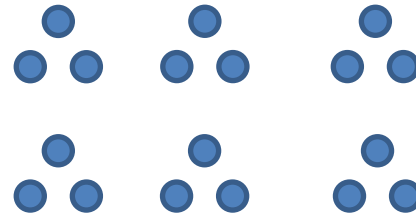
Divide 18 into 3 equal groups.



There are 6 in each group.

Division sentence: $18 \div 3 = \underline{6}$

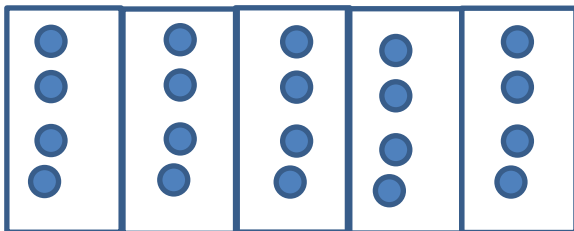
Divide 18 into groups of 3.



There are 6 groups of 3.

Division sentence: $18 \div 3 = \underline{6}$


Divide 20 into 5 equal groups.



There are 4 in each group.

Division sentence: $20 \div 5 = \underline{4}$

Divide 20 into groups of 5.



There are 4 groups of 5.

Division sentence: $20 \div 5 = \underline{4}$