

Name _____

Date _____



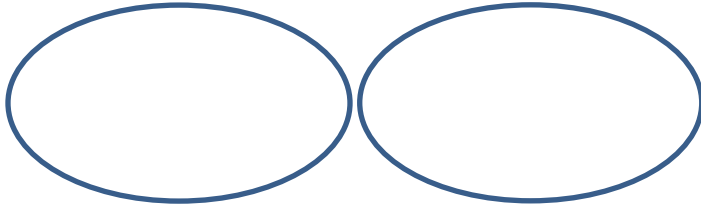
UNDERSTANDING DIVISION 2

Work out the answers to these division sentences using sharing and grouping.

The first one is done for you.

SHARING

Divide 12 into 2 equal groups.



There are ____ in each group.

Division sentence: $12 \div 2 =$ ____


GROUPING

Divide 12 into groups of 2.

There are ____ groups of 2.

Division sentence: $12 \div 2 =$ ____

Divide 15 into 3 equal groups.



There are ____ in each group.

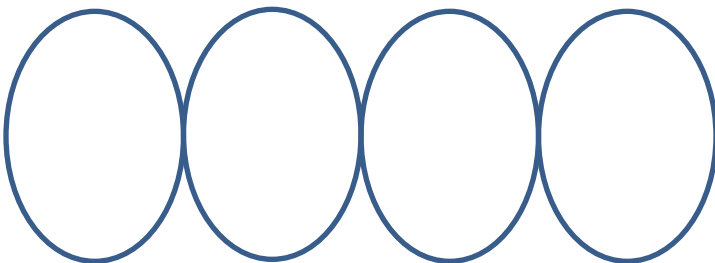
Division sentence: $15 \div 3 =$ ____

Divide 15 into groups of 3.

There are ____ groups of 3.

Division sentence: $15 \div 3 =$ ____

Divide 20 into 4 equal groups.



There are ____ in each group.

Division sentence: $20 \div 4 =$ ____

Divide 20 into groups of 4.

There are ____ groups of 4.

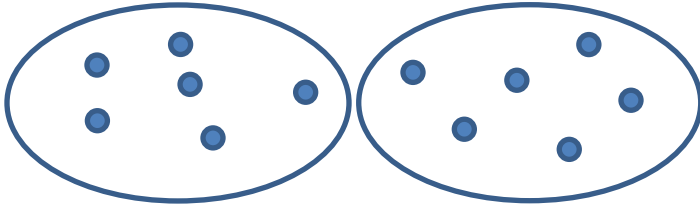
Division sentence: $20 \div 4 =$ ____



UNDERSTANDING DIVISION 2 ANSWERS

SHARING

Divide 12 into 2 equal groups.




There are 6 in each group.

Division sentence: $12 \div 2 = \underline{6}$

GROUPING


Divide 12 into groups of 2.



There are 6 groups of 2.

Division sentence: $12 \div 2 = \underline{6}$


Divide 15 into 3 equal groups.



There are 5 in each group.

Division sentence: $15 \div 3 = \underline{5}$

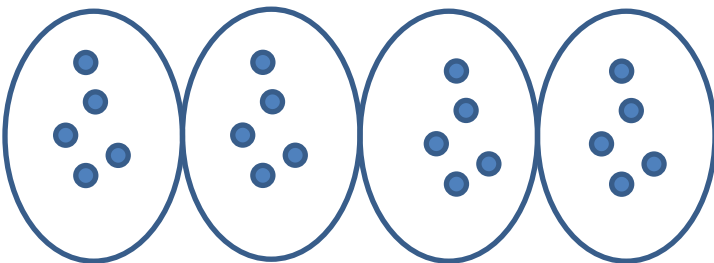
Divide 15 into groups of 3.



There are 5 groups of 3.

Division sentence: $15 \div 3 = \underline{5}$

Divide 20 into 4 equal groups.



There are 5 in each group.

Division sentence: $20 \div 4 = \underline{5}$

Divide 20 into groups of 4.



There are 5 groups of 4.

Division sentence: $20 \div 4 = \underline{5}$