

Name \_\_\_\_\_

Date \_\_\_\_\_



## DIVISION PROBLEMS 2.6

Use the pictures to help you to work out the division problems.

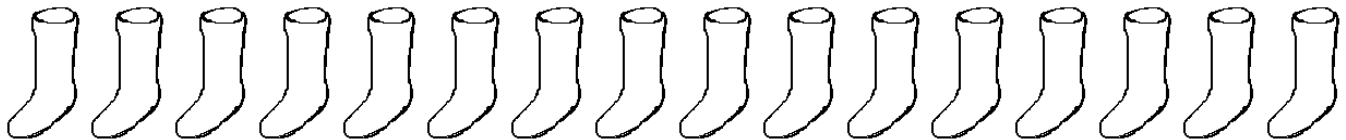
1)  $15 \div 5 =$  \_\_\_\_\_



2)  $20 \div 5 =$  \_\_\_\_\_




3)  $16 \div 4 =$  \_\_\_\_\_



4)  $10 \div 2 =$  \_\_\_\_\_



5)  $20 \div 4 =$  \_\_\_\_\_



Name

Date



## DIVISION PROBLEMS 2.6

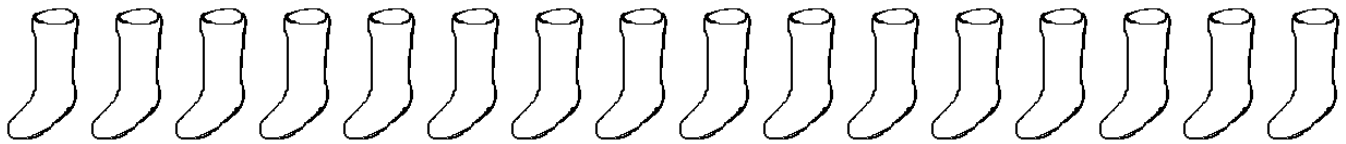
1)  $15 \div 5 = \underline{3}$



2)  $20 \div 5 = \underline{4}$



3)  $16 \div 4 = \underline{4}$



4)  $10 \div 2 = \underline{5}$



5)  $20 \div 4 = \underline{5}$

