

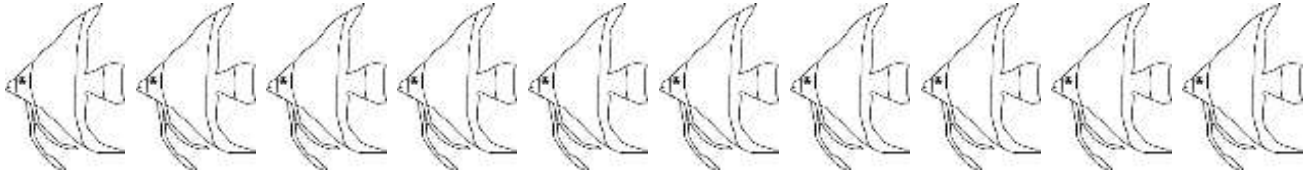
Name _____

Date _____




DIVISION PROBLEMS 2.4

1) Divide the 10 fish into groups of 5. How many groups? _____



Division sentence: $10 \div 5 =$ _____

2) Divide the 8 cats into groups of 4. How many groups? _____



Division sentence: _____ \div _____ = _____

3) Divide the 12 flies into groups of 3. How many groups? _____



Division sentence: _____ \div _____ = _____

4) Divide the 14 spiders into groups of 7. How many groups? _____



Division sentence: _____ \div _____ = _____

5) Divide the 7 dogs into groups of 1. How many groups? _____

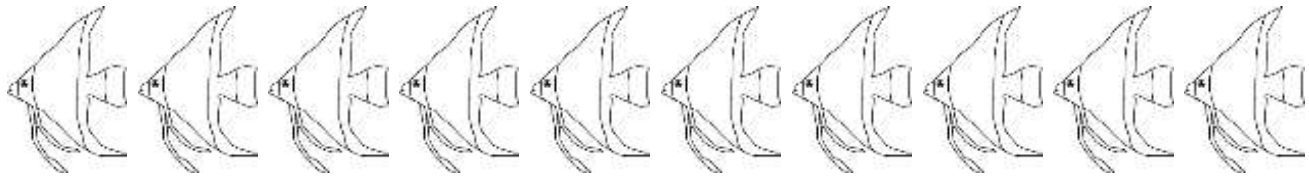


Division sentence: _____ \div _____ = _____



DIVISION PROBLEMS 2.4 ANSWERS

1) Divide the 10 fish into groups of 5. How many groups? 2



Division sentence: $10 \div 5 = \underline{2}$

2) Divide the 8 cats into groups of 4. How many groups? 2



Division sentence: $8 \div 4 = \underline{2}$

3) Divide the 12 flies into groups of 3. How many groups? 4



Division sentence: $12 \div 3 = \underline{4}$

4) Divide the 14 spiders into groups of 7. How many groups? 2



Division sentence: $14 \div 7 = \underline{2}$

5) Divide the 7 dogs into groups of 1. How many groups? 7



Division sentence: $7 \div 1 = \underline{7}$