

Name _____

Date _____




DIVISION PROBLEMS 2.3

1) Divide the 8 apples into groups of 2. How many groups? _____




Division sentence: $8 \div 2 = \underline{\quad}$

2) Divide the 6 oranges into groups of 3. How many groups? _____



Division sentence: $6 \div 3 = \underline{\quad}$

3) Divide the 12 bananas into groups of 4. How many groups? _____



Division sentence: $12 \div 4 = \underline{\quad}$

4) Divide the 5 pears into groups of 5. How many groups? _____



Division sentence: $5 \div 5 = \underline{\quad}$

5) Divide the 9 nectarines into groups of 3. How many groups? _____



Division sentence: $9 \div 3 = \underline{\quad}$




DIVISION PROBLEMS 2.3 ANSWERS

1) Divide the 8 apples into groups of 2. How many groups? 4




Division sentence: $8 \div 2 = \underline{4}$

2) Divide the 6 oranges into groups of 3. How many groups? 2



Division sentence: $6 \div 3 = \underline{2}$

3) Divide the 12 bananas into groups of 4. How many groups? 3



Division sentence: $12 \div 4 = \underline{3}$

4) Divide the 5 pears into groups of 5. How many groups? 1



Division sentence: $5 \div 5 = \underline{1}$

5) Divide the 9 nectarines into groups of 3. How many groups? 3



Division sentence: $9 \div 3 = \underline{3}$