


Name \_\_\_\_\_

Date \_\_\_\_\_

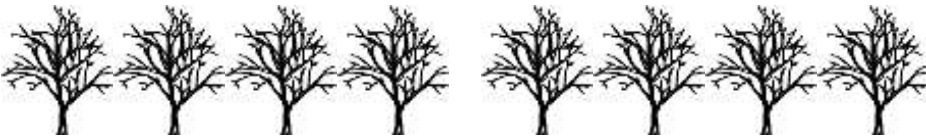


## DIVISION PROBLEMS 2.2


1) How many groups of 3? \_\_\_\_\_



2) How many groups of 4? \_\_\_\_\_



3) How many groups of 2? \_\_\_\_\_



4) How many groups of 5? \_\_\_\_\_



5) How many groups of 10? \_\_\_\_\_



6) How many groups of 3? \_\_\_\_\_




Name

Date

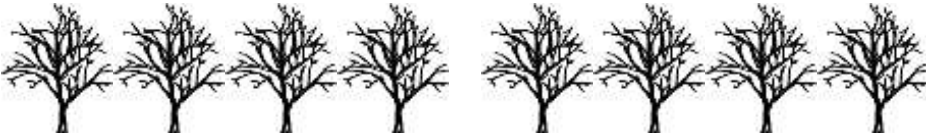


## DIVISION PROBLEMS 2.2 ANSWERS


1) How many groups of 3? 4



2) How many groups of 4? 2



3) How many groups of 2? 5



4) How many groups of 5? 3



5) How many groups of 10? 2



6) How many groups of 3? 3

