



Name























Date



SCALED PICTURE GRAPHS 2C - SANDWICH SURVEY

Children in Salamander class voted on their two tastiest sandwich filling.

Each  represents 2 children. Each  represents one child.

Cheese								
Ham								
Pickle								
Tuna								
Peanut butter								

Sandwich	Votes
Cheese	6
Ham	
Pickle	5
Tuna	
Peanut Butter	

- 1) Use the data in the table to show how many children in the picture graph chose Pickle sandwiches.
- 2) Write down the number of votes in the table for ham, tuna and peanut butter.



2ND GRADE

MATH-SALAMANDERS.COM



Name


























Date



SCALED PICTURE GRAPHS 2C - SANDWICH SURVEY

Children in Salamander class voted on their two tastiest sandwich filling.

Each  represents 2 children. Each  represents one child.

Cheese								
Ham								
Pickle								
Tuna								
Peanut butter								

Sandwich	Votes
Cheese	6
Ham	<u>9</u>
Pickle	5
Tuna	<u>16</u>
Peanut Butter	<u>11</u>

- 1) Use the data in the table to show how many children in the picture graph chose Pickle sandwiches.
- 2) Write down the number of votes in the table for ham, tuna and peanut butter.



2ND GRADE

MATH-SALAMANDERS.COM