

























Name _____

Date _____



PICTURE GRAPHS 2B - BUG HUNT

Some children went on a bug hunt around their school. This is what they saw. Each picture stands for one bug.

Spider								
Crickets								
Snail								
Butterfly								
Beetle								

- 1) The children saw 4 snails. Show this in the picture graph.
- 2) Which bug was the most common? _____
- 3) How many more butterflies than beetles were seen? _____
- 4) How many more crickets than spiders were seen? _____
- 5) How many beetles and snails were seen in total? _____
- 6) How many crickets and spiders were seen in total? _____
- 7) Chloe says 'We saw twice as many spiders as beetles.'
Is she right? _____
- 8) How many bugs were seen altogether? _____



2ND GRADE





























MATH-SALAMANDERS.COM

Name

Date



PICTURE GRAPHS 2B - BUG HUNT ANSWERS

Spider								
Crickets								
Snail								
Butterfly								
Beetle								

- 1) The children saw 4 snails. Show this in the picture graph.
- 2) Which bug was the most common? cricket
- 3) How many more butterflies than beetles were seen? 4
- 4) How many more crickets than spiders were seen? 2
- 5) How many beetles and snails were seen in total? 7
- 6) How many crickets and spiders were seen in total? 14
- 7) Chloe says 'We saw twice as many spiders as beetles.'
Is she right? Yes - 6 spiders and 3 beetles. Double 3 is 6.
- 8) How many bugs were seen altogether? 28



2ND GRADE

MATH-SALAMANDERS.COM